

Math Homework Quarter 3: Week 1

1. 436
How many are in the hundreds place?

2. 31, 131, 231, 331, _____
What goes here?

3. 143, 370, 299
Which is least?

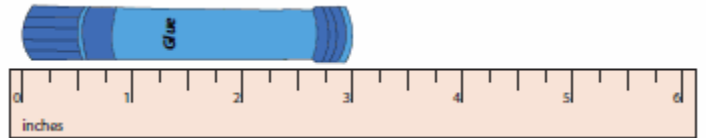
4. What number has
2 tens + 11 ones?

5. Kim has 8 apples. Joe has 7 apples.
How many apples in all?

6. $17 - 9 =$

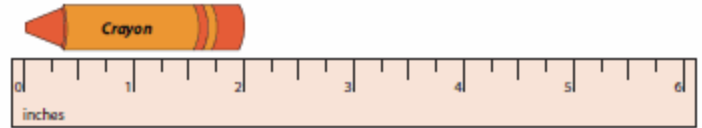
7. Jack has 65 legos.
He gives 26 away.
How many does he have left?

8. How long is the glue?




_____ inches

9. How long is the crayon?



_____ inches

10. How many edges on a square?



_____ edges

11. $504 + 123$
